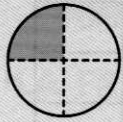



Comparación con la unidad

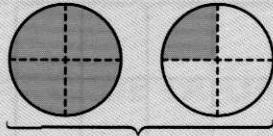
Una fracción puede ser menor, igual o mayor que la unidad.



$$\frac{1}{4} < 1$$



$$\frac{4}{4} = 1$$



$$\frac{5}{4} > 1$$

EJEMPLO

$$\frac{7}{8} < 1$$

$$\frac{9}{11} < 1$$

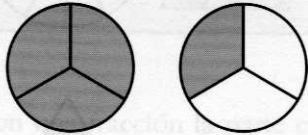
$$\frac{8}{8} = 1$$

$$\frac{11}{11} = 1$$

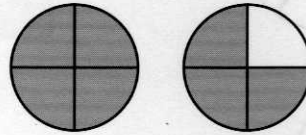
$$\frac{9}{8} > 1$$

$$\frac{14}{11} > 1$$

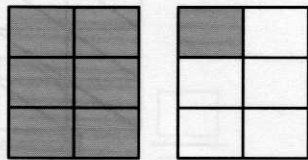
5. Escribe la fracción que corresponde en cada caso y compárala con la unidad.



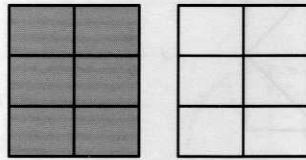
$$\frac{\boxed{4}}{\boxed{3}} > 1$$




$$\frac{\boxed{}}{\boxed{}} \circ 1$$



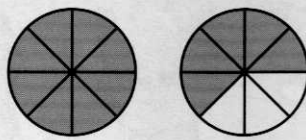
$$\frac{\boxed{}}{\boxed{}} \circ 1$$




$$\frac{\boxed{}}{\boxed{}} = 1$$




$$\frac{\boxed{}}{\boxed{}} = 2 > 1$$



$$\frac{\boxed{}}{\boxed{}} \circ 1$$



$$\frac{\boxed{}}{\boxed{}} \circ 1$$



$$\frac{\boxed{}}{\boxed{}} \circ 1$$